



Name \_\_\_\_\_ Date \_\_\_\_\_




Complete the multiplication equation that describes each array.




$$2 \times \underline{\quad} = 2$$




$$\underline{\quad} \times 2 = 4$$




$$2 \times \underline{\quad} = 6$$




$$\underline{\quad} \times 1 = 3$$




$$3 \times 2 = \underline{\quad}$$




$$\underline{\quad} \times 3 = 9$$



$$4 \times 1 = \underline{\quad}$$



$$\underline{\quad} \times 2 = 8$$



$$4 \times 3 = \underline{\quad}$$