



Name \_\_\_\_\_ Date \_\_\_\_\_

Sarah had 9 carrots.



She gave away 3 carrots to her friend.



How many carrots does Sarah have left?

$$\underline{\quad\quad} - \underline{\quad\quad} = \underline{\quad\quad} \text{ carrots}$$


---




There were 9 frogs in the pond.

4 of the frogs hopped away.

How many frogs are left?

$$\underline{\quad\quad} - \underline{\quad\quad} = \underline{\quad\quad} \text{ frogs}$$


---



John has 6 strawberries.

He eats 2 of them.

How many strawberries does he have left?

$$\underline{\quad\quad} - \underline{\quad\quad} = \underline{\quad\quad} \text{ strawberries}$$